

# Monthly Test August 2025 Fitter Unit 2

Q. ID: ITISKILL9273JV

August 2025

GOVERNMENT ITI VITLA

Question Paper

Duration: 30 Mins

Total Marks: 18

ID: ITISKILL9273JV

Student Name: \_\_\_\_\_ Roll No: \_\_\_\_\_

1. Which of the following options is an Employability Skill?

- A) Good Communication Skills  
B) All of these  
C) Good Interview Skills  
D) Digital Skills

2. When we learn something online, it is called \_\_\_\_\_.

- A) Teaching  
B) Classroom learning  
C) Digital marketing  
D) E-learning

3. Ram works as a fitter in a company. He wants to upgrade his trade skills and employability skills in his free time. What should he do?

- A) Quit job  
B) Play sports  
C) Find courses: online or offline  
D) Watch news

4. Zeena wants to enroll for an e-learning course. The most important thing she needs is a \_\_\_\_\_.

- A) Mobile phone or Computer  
B) Pen  
C) Library card  
D) Book

5. An employee is someone who \_\_\_\_\_.

- A) Goes to play  
B) Goes to school to study  
C) Does not work  
D) Works for a salary

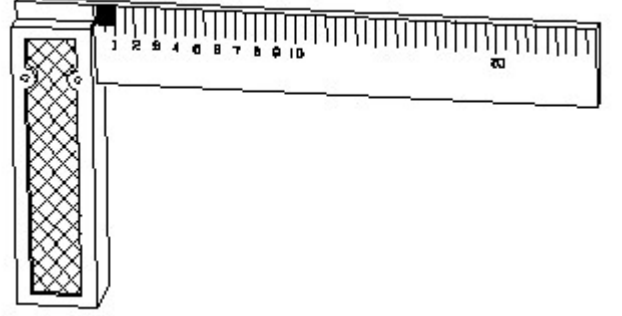
6. What are fundamental units?

- A) Length, Pressure, Volume  
B) Length, Mass, Time  
C) Length, Mass, Volume  
D) Length, Mass, Area

7. What are the two classifications of system of units?

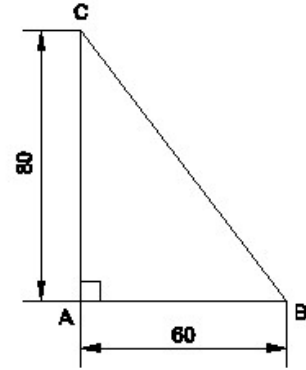
- A) Metric and International  
B) British and Metric  
C) Gravitational and non-gravitational  
D) Fundamental and derived

8. 1). Identify the name of tool? | ಉಪಕರಣದ ಹೆಸರನ್ನು ಗುರುತಿಸುವುದೇ?



- A) Steel rule | ಸ್ಟೀಲ್ ರೂಲ್  
B) Try square | ಟ್ರೈ ಸ್ಕ್ವೇರ್  
C) Surface gauge | ಮೇಲ್ಮೈ ಮಾಪಕ  
D) Feeler gauge | ಫೀಲರ್ ಗೇಜ್

9. Identify the name of the triangle? | ತ್ರಿಕೋನದ ಹೆಸರನ್ನು ಗುರುತಿಸುವುದೇ?

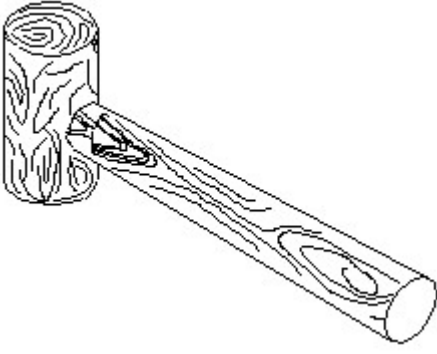


- A) Isosceles triangle | ಸಮದ್ವಿಬಾಹು ತ್ರಿಭುಜ  
B) Equilateral triangle | ಸಮಕೋನ ತ್ರಿಕೋನ  
C) Right angle triangle | ಬಲ ಕೋನ ತ್ರಿಕೋನ  
D) Scalene triangle | ಸ್ಕೇಲಿನ್ ತ್ರಿಕೋನ

10. Which of these is an advantage of learning online?

- A) No need to study  
B) Have shorter classes  
C) Make friends with classmates  
D) Learn anytime & anywhere

11. Identify the name of tool? | ಉಪಕರಣದ ಹೆಸರನ್ನು ಗುರುತಿಸುವುದೇ?



- A) Ball pein hammer | ಬಾಲ್ ಪೆನ್ ಸುತ್ತಿಗೆ  
B) Straight pein hammer | ಸ್ಟ್ರೈಟ್ ಪೆಯಿನ್ ಸುತ್ತಿಗೆ  
C) Cross pein hammer | ಕ್ರಾಸ್ ಪಿನ್ ಸುತ್ತಿಗೆ  
D) Mallet | ಮ್ಯಾಲೆಟ್

12. What denotes letter M in MKS system?

- A) Meter  
B) Mile  
C) Micron  
D) Millimeter

13. Which are the two skills needed for good career growth?

- A) Playing video games & cooking skills  
B) Traveling & Shopping  
C) Technical Skills & Employability Skills  
D) Watching TV & Making friends

14. What are Employability Skills?

- A) Skills needed to be successfully employed  
B) Skills for good communication  
C) Skills for playing video games  
D) Skills used only in sports

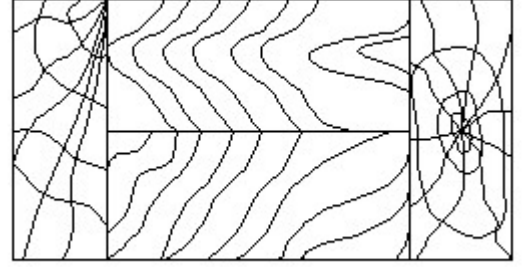
15. Which of these is an e-learning portal?

- A) Bharat Skills Portal  
B) Netflix  
C) NAPS portal  
D) ASEEM

16. How many millimetres are there in 1 inch?

- A) 24.5 mm  
B) 25.4 mm  
C) 2.45 mm  
D) 2.54 mm

17. Identify the conventional symbol of material? | ವಸ್ತುವಿನ ಕನ್ವೆಷನಲ್ ಚಿಹ್ನೆಯನ್ನು ಗುರುತಿಸಿ?



- A) Wood | ಮರ  
B) Paper | ಪೇಪರ್  
C) Lead | ಲೀಡ್  
D) Glass | ಗಾಜು

18. Gopi is always willing to learn and improve in his work. He has a\_\_\_\_\_?.

- A) Certificate  
B) Marksheet  
C) Fixed mindset  
D) Growth mindset