

MONTHLY TEST

OCTOBER 2025 Fitter

Unit 2

Q. ID: ITISKILL6009G3

October 2025

GOVERNMENT ITI VITLA

Question Paper

Duration: 30 Mins

Total Marks: 18

ID: ITISKILL6009G3

Student Name: _____ Roll No: _____

1. Divide $(20/31)/(15/62)$

- A) $2(3/2)$ B) $2(4/3)$
C) $2(1/3)$ D) $2(2/3)$

2. Scientists are warning us that the rise in earth's temperature causes _____.

- A) Global warming B) Deforestation
C) Land sliding D) Pollution

3. Simplify: $(17.49 \times 5.2)/(6.5)$

- A) 13.69 B) 13.89
C) 13.99 D) 13.79

4. Major changes took place in the manufacturing world with _____.

- A) Industrial revolution B) Green revolution
C) White revolution D) Milk revolution

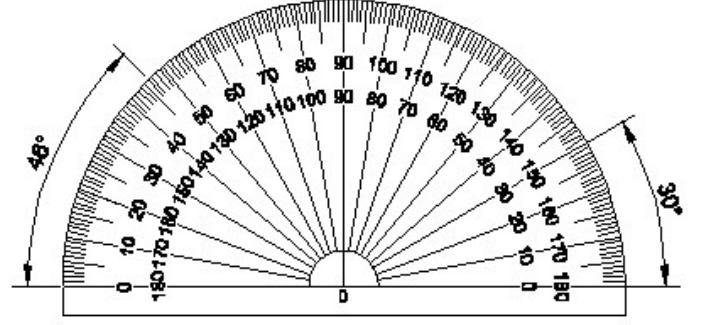
5. Regular assessment of skills is necessary for the growth of _____.

- A) Interview B) Job
C) Career D) Skill

6. Cutting down of trees for farming and housing purposes is called _____.

- A) Deforestation B) Afforestation
C) Reforestation D) Forestation

7. Identify the name of instrument? | ಉಪಕರಣದ ಹೆಸರನ್ನು ಗುರುತಿಸುವುದೇ?



- A) French curve | ಫ್ರೆಂಚ್ ಕರ್ವ್ B) T square | ಸ್ಕ್ವೇರ್
C) Set square | ಸೆಟ್ ಸ್ಕ್ವೇರ್ D) Protractor | ಪ್ರೊಟ್ರಾಕ್ಟರ್

8. The process of manufacturing has changed due to technology and _____ development.

- A) Training B) Teaching
C) Scientific D) Facilitation

9. Simplify: $(3/4) + (2/5) - (5/20)$

- A) $(12/10)$ B) $(3/10)$
C) $(9/10)$ D) $(13/10)$

10. Releasing chemicals, waste, plastics into the water is called _____.

- A) Water Pollution B) Land pollution
C) Air pollution D) Sound pollution

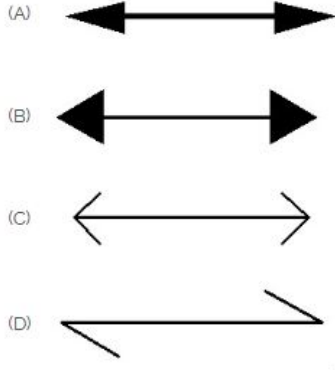
11. What is the product of 0.003×0.5 ?

- A) 0.015 B) 0.00015
C) 0.0015 D) 0.15

12. Shyam avoids the use of plastic and chemical fertilizers. He is practising a _____.

- A) Unhealthy lifestyle B) Busy lifestyle
C) Modern lifestyle D) Green lifestyle

13. Which arrow head is correct as per standard? | ಮಾನದಂಡದ ಪ್ರಕಾರ ಯಾವ ಬಾಣದ ಹೆಡ್ ಸರಿಯಾಗಿದೆ?



- A) D
C) C
- B) A
D) B

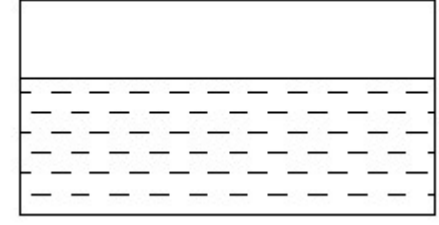
14. Neetu has excellent story telling skills. What type of intelligence is it?

- A) Word Smart
C) Picture Smart
- B) Logic Smart
D) Body Smart

15. Addition of harmful smoke, gases and chemicals to the environment in large quantities is called _____

- A) Storm
C) Air
- B) Pollution
D) Wind

16. Identify the conventional symbol of material? | ವಸ್ತುವಿನ ಕನ್ವೆಷನಲ್ ಚಿಹ್ನೆಯನ್ನು ಗುರುತಿಸಿ?

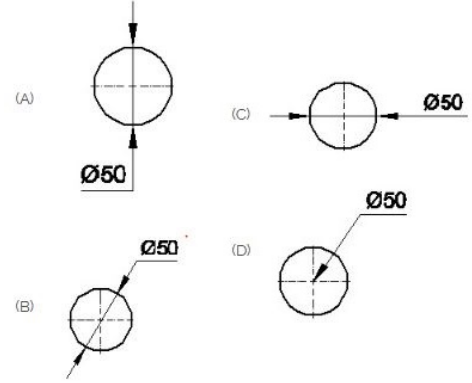


- A) Asbestos | ಅಸ್ಬೆಸ್ಟೋಸ್
C) Concrete | ಕಾಂಕ್ರೀಟ್
- B) Water | ನೀರು
D) Glass | ಗಾಜು

17. Swaraj is looking for internet-based/data entry jobs. What is the most important skill he needs?

- A) Wood cutting skills
C) Basic computer skills
- B) Entrepreneuria I skills
D) Beautician skills

18. Which dimension correctly marked in the circle as per standard? | ಮಾನದಂಡದ ಪ್ರಕಾರ ವೃತ್ತದಲ್ಲಿ ಯಾವ ಆಯಾಮವನ್ನು ಸರಿಯಾಗಿ ಗುರುತಿಸಲಾಗಿದೆ?



- A) C
C) B
- B) A
D) D