

# ITI Quiz - 05-May-2026

## 09:43 AM

Q. ID: ITISKILL4708GO

May 2026

GOVERNMENT ITI SHAHAPUR

Question Paper

Duration: 30 Mins

Total Marks: 25

ID: ITISKILL4708GO

Student Name: \_\_\_\_\_

Roll No: \_\_\_\_\_

1. How can you become self-employed?

- A) Try your idea on a small scale  
B) Learn about the work, take small courses  
C) Use chats, local ads and ask friends to spread the word  
D) All of these

2. What is the use of screw driver?

- A) Tighten or loosen rivets  
B) Hold the screws  
C) Tighten or loosen screws  
D) Tighten or loosen bolts

3. Which property of the capacitor stores electrical energy in electrostatic field?

- A) Dielectric  
B) Capacitive reactance  
C) Stray capacitance  
D) Capacitance

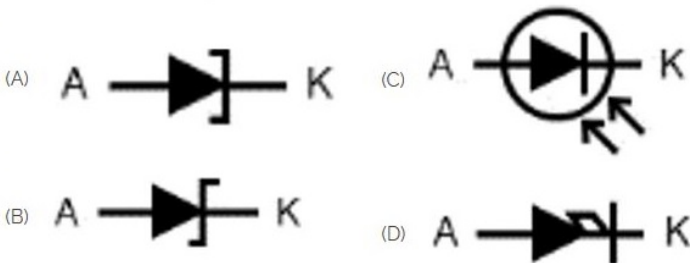
4. What is the reason for electric fire?

- A) Proper earthing  
B) Open circuit  
C) Overloading  
D) Deviation

5. How many ohms is equal to one Mega ohm?


- A) 1000 kW  
B) 2000 kW  
C) 10 kW  
D) 100 kW

6. Which is photo diode? | ಫೋಟೋ ಡಯೋಡ್ ಯಾವುದು?



- A) C  
B) D  
C) B  
D) A

7. Which is ball peen hammer? | ಬಾಲ್ ಪೀನ್ ಸುತ್ತಿಗೆ ಯಾವುದು?



- A) A  
B) C  
C) D  
D) B

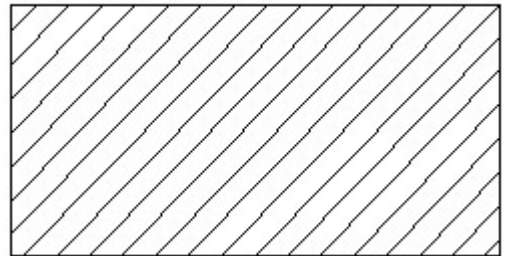
8. What is an example of formal written communication?

- A) Texting a friend  
B) Sending a WhatsApp message  
C) Writing an email to your manager  
D) Posting on social media platforms

9. What is the advantage of using digital multimeter?

- A) Accuracy  
B) Linear scale  
C) Logarithmic scale  
D) Easy portability

10. Identify the conventional symbol of material? | ವಸ್ತುವಿನ ಕನ್ವೆಷನಲ್ ಚಿಹ್ನೆಯನ್ನು ಗುರುತಿಸಿ?



- A) Glass | ಗಾಜು  
B) Lead | ಲೀಡ್  
C) Steel | ಸ್ಟೀಲ್  
D) Porcelain | ಪಿಂಗಾಣಿ

11. What is the first step to rescue the person in electrical contact?

- A) Switch OFF power supply  
B) Call the doctor

C) Pull the person from electrical contact

D) Break the contact

12. Identify the given symbol | ನೀಡಿರುವ ಚಿಹ್ನೆಯನ್ನು ಗುರುತಿಸಿ



A) AC

B) Ohms | ಓಮ್ಸ್

C) DC

D) Inductance | ಇಂಡಕ್ಟೆನ್ಸ್

13. Why is it important to have a business plan before starting a business?

A) All of these

B) To attract investors and get a loan

C) To outline goals and set clear direction for growth

D) To identify potential challenges and risks

14. Which unit is used to measure capacitance value?

A) Ohm

B) Henry

C) Mho

D) Farad

15. Raghav joined a new company after COVID. He is nervous about using the digital tablets provided at work. What should he do?

A) Keep an open mind and ask his coworkers to teach him

B) Ask his coworkers to do all the digital work

C) Quit his job

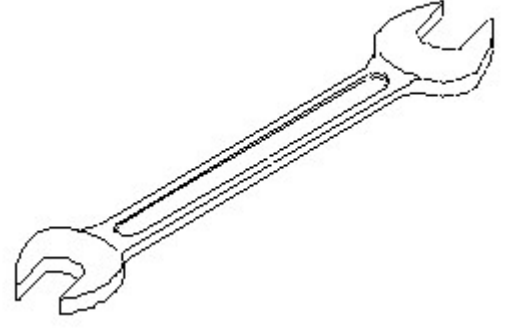
D) Complain to his manager

16. To apply for a job, what is the next step after making an impactful resume?

A) Preparing for interview  
C) Sending the resume to the employer

B) Applying for the job  
D) Writing an impressive cover letter

17. Identify the name of tool? | ಉಪಕರಣದ ಹೆಸರನ್ನು ಗುರುತಿಸುವುದೇ?



A) Combination spanner | ಕಾಂಬಿನೇಶನ್ ಸ್ಪಾನರ್

B) Adjustable spanner | ಹೊಂದಿಸಬಹುದಾದ ಸ್ಪಾನರ್

C) Ring spanner | ರಿಂಗ್ ಸ್ಪಾನರ್

D) Open end spanner | ಓಪನ್ ಎಂಡ್ ಸ್ಪಾನರ್

18. During a lunch break, Arjun overhears his coworkers gossiping about another coworker. What should Arjun do?

A) Join the conversation and share his own opinion about the coworker

B) Tell his coworkers that gossiping is inappropriate workplace behaviour

C) Tell another coworker about the gossip

D) Listen to the gossip

19. What is the trimmed size of A4 sheet? | A4 ಹಾಳೆಯು ಟ್ರಿಮ್ ಮಾಡಿದ ಗಾತ್ರ ಎಷ್ಟು?

A) 594 x 841

B) 210 x 297

C) 148 x 210

D) 841 x 1189

20. Pranav is working on his resume. While reviewing his resume, what should Pranav keep in mind?

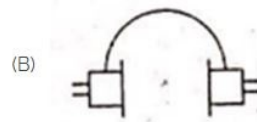
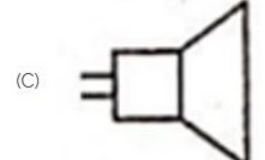
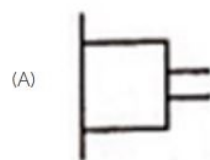
A) Ensure that the information provided is correct

B) Check for spelling and grammar mistakes

C) All of these

D) Highlight skills and qualifications that match the job

21. Identify the symbol used for microphone (general) in electrical and electronic circuits. | ಎಲೆಕ್ಟ್ರಿಕಲ್ ಮತ್ತು ಎಲೆಕ್ಟ್ರಾನಿಕ್ ಸರ್ಕ್ಯೂಟ್‌ಗಳಲ್ಲಿ ಮೈಕ್ರೋಫೋನ್ (ಸಾಮಾನ್ಯ) ಗಾಗಿ ಬಳಸುವ ಚಿಹ್ನೆಯನ್ನು ಗುರುತಿಸಿ.



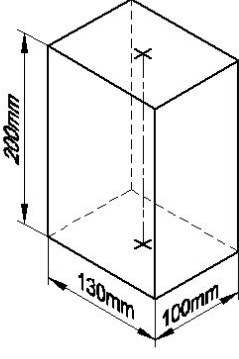
A) D

B) B

C) A

D) C

22. Identify the name of prism? | ಪ್ರಿಸ್ತು ಹೆಸರನ್ನು ಗುರುತಿಸುವುದೇ?



- A) Rectangle prism | ಆಯತ ಪ್ರಿಸ್ತು  
B) Triangular prism | ತ್ರಿಕೋನ ಪ್ರಿಸ್ತು  
C) Hexagonal prism | ಷಡ್ಭುಜೀಯ ಪ್ರಿಸ್ತು  
D) Square prism | ಚದರ ಪ್ರಿಸ್ತು

23. What is the name of the gate | ಗೇಟ್ ಹೆಸರೇನು?

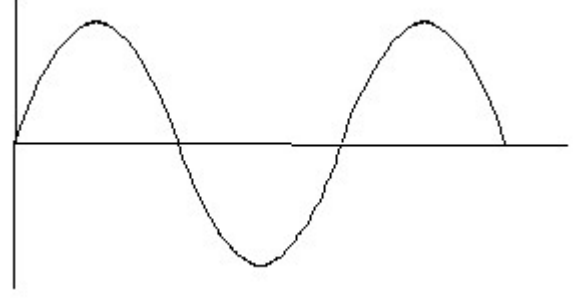


- A) NOT Gate | NOT ಗೇಟ್  
B) Ex-NOR Gate | Ex-NOR ಗೇಟ್  
C) AND Gate | AND ಗೇಟ್  
D) OR Gate | OR ಗೇಟ್

24. Which parameter is measured by a multimeter?

- A) Energy  
B) Voltage  
C) Frequency  
D) Time duration

25. Identify the wave form. | ವೇವ್ ಫಾರ್ಮ್ ವನ್ನು ಗುರುತಿಸಿ.



- A) Square wave | ಸ್ಕ್ವೇರ್ ವೇವ್  
B) Triangle wave | ತ್ರಿಕೋನ ವೇವ್  
C) Sine wave | ಸೈನ್ ವೇವ್  
D) Saw-tooth wave | ಸಾ-ಟೂತ್ ವೇವ್