

Student: Ravi kiran  
Score: 13/25 (52.00%)

Code: 8314

1. Which parameter is measured by a multimeter?

- A) **Voltage (Correct)**      B) Energy  
C) Frequency      D) Time duration

2. What is the advantage of using digital multimeter?

- A) **Accuracy (Correct)**      B) Linear scale  
C) Easy portability      D) Logarithmic scale

3. How many ohms is equal to one Mega ohm?

- A) 10 kW (Incorrect)      B) 100 kW  
C) **1000 kW**      D) 2000 kW

4. Which property of the capacitor stores electrical energy in electrostatic field?

- A) Dielectric      B) Capacitance  
C) Stray capacitance      D) **Capacitive reactance (Correct)**

5. Which unit is used to measure capacitance value?

- A) Mho      B) Ohm (Incorrect)  
C) **Farad**      D) Henry

6. What is the use of screw driver?

- A) Hold the screws      B) **Tighten or loosen screws**  
C) Tighten or loosen bolts      D) Tighten or loosen rivets (Incorrect)

7. What is the first step to rescue the person in electrical contact?

- A) Break the contact      B) Call the doctor  
C) **Switch OFF power supply (Correct)**      D) Pull the person from electrical contact

8. What is the reason for electric fire?

- A) Deviation      B) Open circuit  
C) **Overloading (Correct)**      D) Proper earthing

9. To apply for a job, what is the next step after making an impactful resume?

- A) Sending the resume to the employer (Incorrect)      B) **Writing an impressive cover letter**  
C) Preparing for interview      D) Applying for the job

10. Pranav is working on his resume. While reviewing his resume, what should Pranav keep in mind?

- A) Check for spelling and grammar mistakes      B) Ensure that the information provided is correct (Incorrect)  
C) Highlight skills and qualifications that match the job      D) **All of these**

11. What is an example of formal written communication?

- A) Texting a friend      B) Sending a WhatsApp message (Incorrect)  
C) **Writing an email to your manager**      D) Posting on social media platforms

12. During a lunch break, Arjun overhears his coworkers gossiping about another coworker. What should Arjun do?

- A) **Tell his coworkers that gossiping is inappropriate workplace behaviour (Correct)**      B) Join the conversation and share his own opinion about the coworker  
C) Tell another coworker about the gossip      D) Listen to the gossip

13. Why is it important to have a business plan before starting a business?

- A) To attract investors and get a loan      B) To outline goals and set clear direction for growth (Incorrect)  
C) To identify potential challenges and risks      D) **All of these**

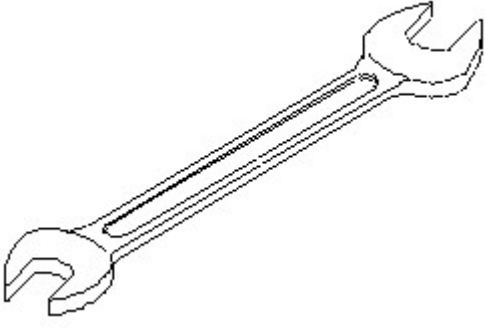
14. Raghav joined a new company after COVID. He is nervous about using the digital tablets provided at work. What should he do?

- A) Complain to his manager      B) Ask his coworkers to do all the digital work  
C) Quit his job      D) **Keep an open mind and ask his coworkers to teach him (Correct)**

15. How can you become self-employed?

- A) Learn about the work, take small courses (Incorrect)      B) Try your idea on a small scale  
C) Use chats, local ads and ask friends to spread the word      D) **All of these**

16. Identify the name of tool? | ಉಪಕರಣದ ಹೆಸರನ್ನು ಗುರುತಿಸುವುದೇ?

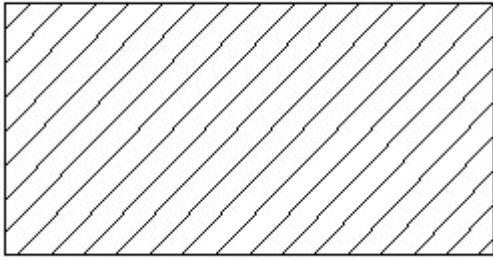


- A) Open end spanner | ಓಪನ್ ಎಂಡ್ ಸ್ಪ್ಯಾನರ್ (Correct)      B) Ring spanner | ರಿಂಗ್ ಸ್ಪ್ಯಾನರ್  
C) Combination spanner | ಕಾಂಬಿನೇಶನ್ ಸ್ಪ್ಯಾನರ್      D) Adjustable spanner | ಹೊಂದಿಸಬಹುದಾದ ಸ್ಪ್ಯಾನರ್

17. What is the trimmed size of A4 sheet? | A4 ಹಾಳೆಯು ಕ್ರಿಮ್ ಮಾಡಿದ ಗಾತ್ರ ಎಷ್ಟು?

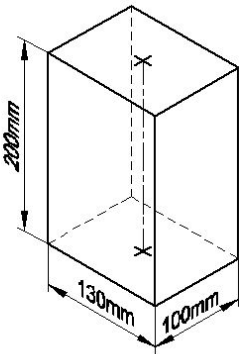
- A) 841 x 1189      B) 594 x 841  
C) 210 x 297 (Correct)      D) 148 x 210

18. Identify the conventional symbol of material? | ವಸ್ತುವಿನ ಕನ್ವೆಷನಲ್ ಚಿಹ್ನೆಯನ್ನು ಗುರುತಿಸಿ?



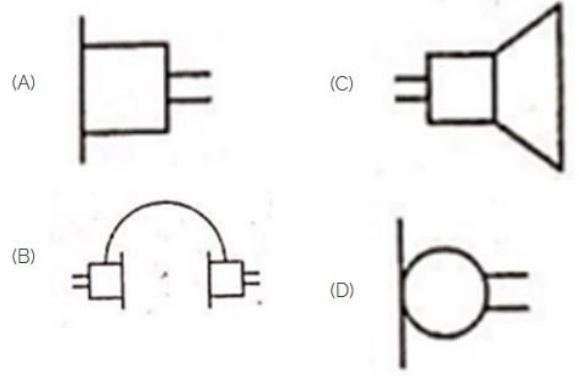
- A) Lead | ಲೀಡ್      B) Steel | ಸ್ಟೀಲ್  
C) Glass | ಗಾಜು (Incorrect)      D) Porcelain | ಪಿಂಗಾಣಿ

19. Identify the name of prism? | ಪ್ರಿಸ್ಮ್ ಹೆಸರನ್ನು ಗುರುತಿಸುವುದೇ?



- A) Rectangle prism | ಆಯತ ಪ್ರಿಸ್ಮ್ (Correct)      B) Square prism | ಚದರ ಪ್ರಿಸ್ಮ್  
C) Triangular prism | ತ್ರಿಕೋನ ಪ್ರಿಸ್ಮ್      D) Hexagonal prism | ಷಡ್ಭುಜೀಯ ಪ್ರಿಸ್ಮ್

20. Identify the symbol used for microphone (general) in electrical and electronic circuits. | ಎಲೆಕ್ಟ್ರಿಕಲ್ ಮತ್ತು ಎಲೆಕ್ಟ್ರಾನಿಕ್ ಸರ್ಕ್ಯೂಟ್‌ಗಳಲ್ಲಿ ಮೈಕ್ರೋಫೋನ್ (ಸಾಮಾನ್ಯ) ಗಾಗಿ ಬಳಸುವ ಚಿಹ್ನೆಯನ್ನು ಗುರುತಿಸಿ.



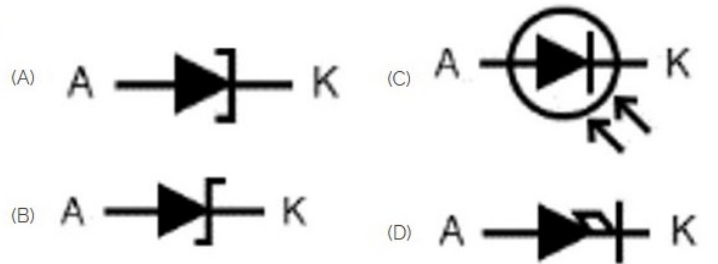
- A) A      B) B  
C) C (Incorrect)      D) D

21. What is the name of the gate | ಗೇಟ್ ಹೆಸರೇನು?



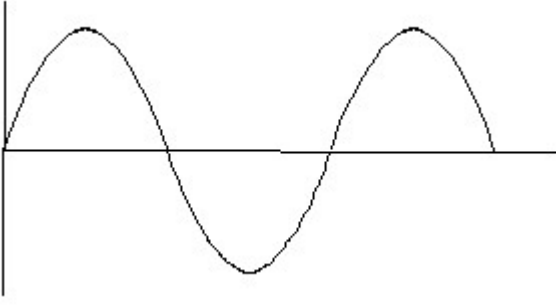
- A) NOT Gate | NOT ಗೇಟ್ (Incorrect)      B) Ex-NOR Gate | Ex-NOR ಗೇಟ್  
C) OR Gate | OR ಗೇಟ್      D) AND Gate | AND ಗೇಟ್

22. Which is photo diode? | ಫೋಟೋ ಡಯೋಡ್ ಯಾವುದು?



- A) A      B) B  
C) C (Correct)      D) D


23. Identify the wave form. | ವೇವ್ ಫಾರ್ಮ್ ವನ್ನು ಗುರುತಿಸಿ.



- A) Square wave | ಸ್ಕ್ವೇರ್ ವೇವ್  
C) Triangle wave | ತ್ರಿಕೋನ ವೇವ್

- B) Sine wave | ಸೈನ್ ವೇವ್  
(Correct)  
D) Saw-tooth wave | ಸಾ-ಟೂತ್ ವೇವ್

24. Which is ball peen hammer? | ಬಾಲ್ ಪೀನ್ ಸುತ್ತಿಗೆ ಯಾವುದು?



- A) A (Incorrect)  
C) C

- B) B  
D) D

25. Identify the given symbol | ನೀಡಿರುವ ಚಿಹ್ನೆಯನ್ನು ಗುರುತಿಸಿ



- A) AC (Correct)  
C) Ohms | ಓಮ್ಸ್

- B) DC  
D) Inductance | ಇಂಡಕ್ಟೆನ್ಸ್