

ITI Quiz - 05-May-2026

09:43 AM

Q. ID: ITISKILL4708GO

May 2026

GOVERNMENT ITI SHAHAPUR

Answer Key

Duration: 30 Mins

Total Marks: 25

Q.ID: ITISKILL4708GO

1. How many ohms is equal to one Mega ohm?

- A) 100 kW B) 2000 kW
C) 1000 kW D) 10 kW

Answer: C) 1000 kW

2. How can you become self-employed?

- A) Learn about the work, take small courses B) All of these
C) Try your idea on a small scale D) Use chats, local ads and ask friends to spread the word

Answer: B) All of these

3. What is the use of screw driver?

- A) Tighten or loosen screws B) Hold the screws
C) Tighten or loosen bolts D) Tighten or loosen rivets

Answer: A) Tighten or loosen screws

4. Raghav joined a new company after COVID. He is nervous about using the digital tablets provided at work. What should he do?

- A) Complain to his manager B) Quit his job
C) Keep an open mind and ask his coworkers to teach him D) Ask his coworkers to do all the digital work

Answer: C) Keep an open mind and ask his coworkers to teach him

5. Which property of the capacitor stores electrical energy in electrostatic field?

- A) Dielectric B) Capacitance
C) Capacitive reactance D) Stray capacitance

Answer: C) Capacitive reactance

6. Identify the given symbol | ನೀಡಿರುವ ಚಿಹ್ನೆಯನ್ನು ಗುರುತಿಸಿ



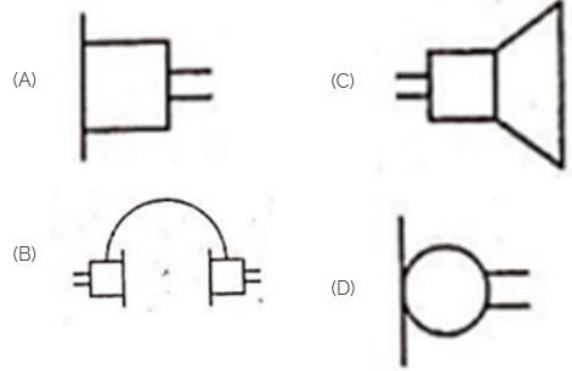
- A) Inductance | ಇಂಡಕ್ಟೆನ್ಸ್ B) AC

C) Ohms | ಓಮ್ಸ್

D) DC

Answer: B) AC

7. Identify the symbol used for microphone (general) in electrical and electronic circuits. | ಎಲೆಕ್ಟ್ರಿಕಲ್ ಮತ್ತು ಎಲೆಕ್ಟ್ರಾನಿಕ್ ಸರ್ಕ್ಯೂಟ್‌ಗಳಲ್ಲಿ ಮೈಕ್ರೋಫೋನ್ (ಸಾಮಾನ್ಯ) ಗಾಗಿ ಬಳಸುವ ಚಿಹ್ನೆಯನ್ನು ಗುರುತಿಸಿ.



A) C

B) D

C) A

D) B

Answer: B) D

8. What is the reason for electric fire?

- A) Deviation B) Overloading
C) Proper earthing D) Open circuit

Answer: B) Overloading

9. During a lunch break, Arjun overhears his coworkers gossiping about another coworker. What should Arjun do?

- A) Tell his coworkers that gossiping is inappropriate workplace behaviour B) Listen to the gossip
C) Tell another coworker about the gossip D) Join the conversation and share his own opinion about the coworker

Answer: A) Tell his coworkers that gossiping is inappropriate workplace behaviour

10. Which parameter is measured by a multimeter?

- A) Energy B) Frequency
C) Voltage D) Time duration

Answer: C) Voltage

11. Pranav is working on his resume. While reviewing his resume, what should Pranav keep in mind?

A) Highlight skills and qualifications that match the job

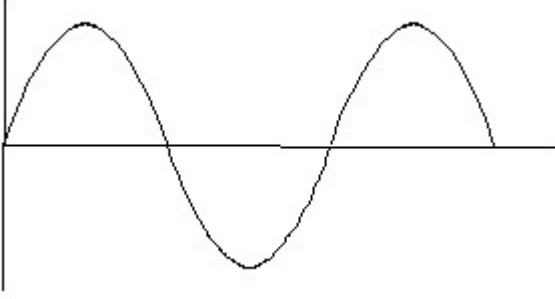
B) Check for spelling and grammar mistakes

C) All of these

D) Ensure that the information provided is correct

Answer: C) All of these

12. Identify the wave form. | ವೇವ್ ಫಾರ್ಮ್ ವನ್ನು ಗುರುತಿಸಿ.



A) Saw-tooth wave | ಸಾ-ಟೂತ್ ವೇವ್

B) Square wave | ಸ್ಕ್ವೇರ್ ವೇವ್

C) Triangle wave | ತ್ರಿಕೋನ ವೇವ್

D) Sine wave | ಸೈನ್ ವೇವ್

Answer: D) Sine wave | ಸೈನ್ ವೇವ್

13. Which unit is used to measure capacitance value?

A) Henry

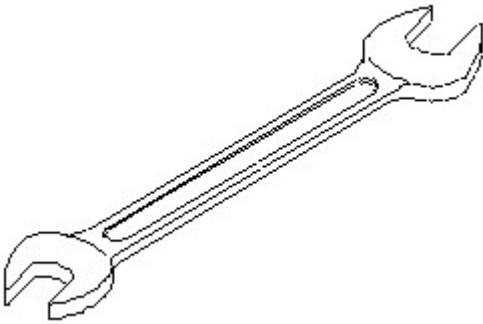
B) Ohm

C) Farad

D) Mho

Answer: C) Farad

14. Identify the name of tool? | ಉಪಕರಣದ ಹೆಸರನ್ನು ಗುರುತಿಸುವುದೇ?



A) Adjustable spanner | ಹೊಂದಿಸಬಹುದಾದ ಸ್ಪ್ಯಾನರ್

B) Ring spanner | ರಿಂಗ್ ಸ್ಪ್ಯಾನರ್

C) Open end spanner | ಓಪನ್ ಎಂಡ್ ಸ್ಪ್ಯಾನರ್

D) Combination spanner | ಕಾಂಬಿನೇಷನ್ ಸ್ಪ್ಯಾನರ್

Answer: C) Open end spanner | ಓಪನ್ ಎಂಡ್ ಸ್ಪ್ಯಾನರ್

15. What is the first step to rescue the person in electrical contact?

A) Break the contact

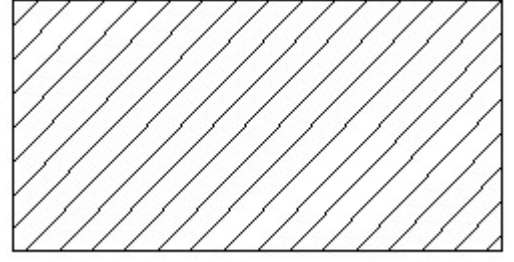
B) Call the doctor

C) Switch OFF power supply

D) Pull the person from electrical contact

Answer: C) Switch OFF power supply

16. Identify the conventional symbol of material? | ವಸ್ತುವಿನ ಕನ್ವೆಷನಲ್ ಚಿಹ್ನೆಯನ್ನು ಗುರುತಿಸಿ?



A) Steel | ಸ್ಟೀಲ್

B) Porcelain | ಪಿಂಗಾಣಿ

C) Lead | ಲೀಡ್

D) Glass | ಗಾಜು

Answer: A) Steel | ಸ್ಟೀಲ್

17. Which is ball peen hammer? | ಬಾಲ್ ಪೀನ್ ಸುತ್ತಿಗೆ ಯಾವುದು?



A) D

B) A

C) C

D) B

Answer: D) B

18. What is the trimmed size of A4 sheet? | A4 ಹಾಳೆಯು ಟ್ರಿಮ್ ಮಾಡಿದ ಗಾತ್ರ ಎಷ್ಟು?

A) 148 x 210

B) 210 x 297

C) 841 x 1189

D) 594 x 841

Answer: B) 210 x 297

19. What is the advantage of using digital multimeter?

A) Linear scale

B) Logarithmic scale

C) Accuracy

D) Easy portability

Answer: C) Accuracy

20. What is the name of the gate | ಗೇಟ್ ಹೆಸರೇನು?



A) OR Gate | OR ಗೇಟ್

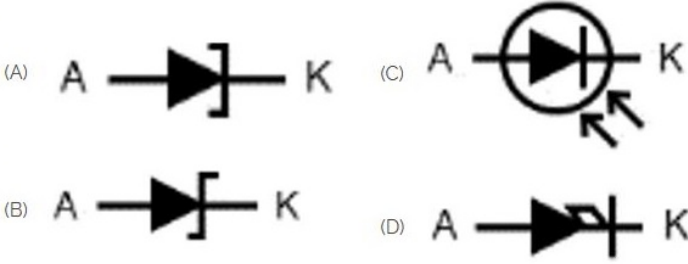
B) Ex-NOR Gate | Ex-NOR ಗೇಟ್

C) NOT Gate | NOT ಗೇಟ್

D) AND Gate | AND ಗೇಟ್

Answer: D) AND Gate | AND ಗೇಟ್

21. Which is photo diode? | ಫೋಟೋ ಡಯೋಡ್ ಯಾವುದು?



A) D

B) A

C) B

D) C

Answer: D) C

22. To apply for a job, what is the next step after making an impactful resume?

A) Sending the resume to the employer

B) Writing an impressive cover letter

C) Preparing for interview

D) Applying for the job

Answer: B) Writing an impressive cover letter

23. What is an example of formal written communication?

A) Texting a friend

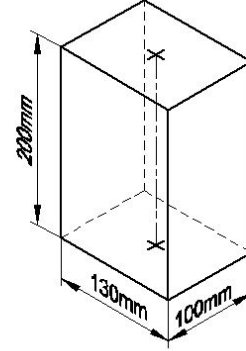
B) Writing an email to your manager

C) Sending a WhatsApp message

D) Posting on social media platforms

Answer: B) Writing an email to your manager

24. Identify the name of prism? | ಪ್ರಿಸ್ಮ್ ಹೆಸರನ್ನು ಗುರುತಿಸುವುದೇ?



A) Hexagonal prism | ಷಡ್ಭುಜೀಯ ಪ್ರಿಸ್ಮ್

B) Rectangle prism | ಆಯತ ಪ್ರಿಸ್ಮ್

C) Square prism | ಚದರ ಪ್ರಿಸ್ಮ್

D) Triangular prism | ತ್ರಿಕೋನ ಪ್ರಿಸ್ಮ್

Answer: B) Rectangle prism | ಆಯತ ಪ್ರಿಸ್ಮ್

25. Why is it important to have a business plan before starting a business?

A) All of these

B) To attract investors and get a loan

C) To outline goals and set clear direction for growth

D) To identify potential challenges and risks

Answer: A) All of these