

Duration: 30 Mins

Total Marks: 6


ID: ITISKILL2774ZX

Student Name: \_\_\_\_\_

Roll No: \_\_\_\_\_


1. To apply for a job, what is the next step after making an impactful resume?

- A) Writing an impressive cover letter  
B) Sending the resume to the employer  
C) Applying for the job  
D) Preparing for interview



2. Which of the following are included in a resume?

- A) Hobbies, favorite foods, and personal interests  
B) Contact information, educational details, skills and work experience  
C) Childhood memories, dreams, and aspirations  
D) Daily routine, favorite movies, and vacation plans



- A) B  
C) D

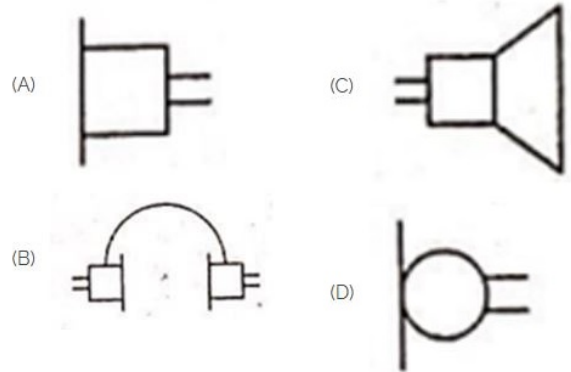
- B) C  
D) A

3. What is the name of the gate | ಗೇಟ್ ಹೆಸರೇನು?



- A) NOT Gate | NOT ಗೇಟ್  
B) OR Gate | OR ಗೇಟ್  
C) AND Gate | AND ಗೇಟ್  
D) Ex-NOR Gate | Ex-NOR ಗೇಟ್

4. Which is a symbol of DC motor? | DC ಮೋಟರ್‌ನ ಸಂಕೇತ ಯಾವುದು?



- A) A  
C) D

- B) C  
D) B

5. What is the fuse rate to run a 10 HP in three phase induction motor at full load? | ಫುಲ್ ಲೋಡ್‌ನಲ್ಲಿ ಮೂರು ಫೇಸ್ ಇಂಡಕ್ಷನ್ ಮೋಟಾರ್‌ನಲ್ಲಿ 10 HP ಅನ್ನು ಚಲಾಯಿಸಲು ಫ್ಯೂಸ್ ರೇಟ್ ಎಷ್ಟು?

- A) 25 A  
C) 10 A

- B) 30 A  
D) 15 A

6. Identify the symbol used for microphone (general) in electrical and electronic circuits. | ಎಲೆಕ್ಟ್ರಿಕಲ್ ಮತ್ತು ಎಲೆಕ್ಟ್ರಾನಿಕ್ ಸರ್ಕ್ಯೂಟ್‌ಗಳಲ್ಲಿ ಮೈಕ್ರೋಫೋನ್ (ಸಾಮಾನ್ಯ) ಗಾಗಿ ಬಳಸುವ ಚಿಹ್ನೆಯನ್ನು ಗುರುತಿಸಿ.