

# MONTHLY TEST

## NOVEMBER 2025 Fitter

### Unit 2

Q. ID: ITISKILL0897XI

October 2025

GOVERNMENT ITI VITLA

Answer Key

Duration: 30 Mins

Total Marks: 18

Q.ID: ITISKILL0897XI

1. Which of the following is not a part of one's personality?

- A) Strengths B) Weaknesses  
C) Skin colour D) Beliefs

Answer: C) Skin colour

2. What is the definition of ratio?

- A) Equality between two ratios B) Relation of two quantities of the same kind  
C) Inequality between two ratios D) Relation of two quantities of the different kind

Answer: B) Relation of two quantities of the same kind

3. What percentage of 80 is 20?

- A) 0.2 B) 0.8  
C) 0.4 D) 0.25

Answer: D) 0.25

4. What is the square root of 0.017?

- A) 0.13 B) 0.001  
C) 0.000001 D) 0.00001

Answer: A) 0.13

5. Bijo is not good at MS excel. With his hard work, he learns to overcome weaknesses and turn them into a\_\_\_\_\_.

- A) Belief B) Strength  
C) Leader D) Value

Answer: B) Strength

6. What is the ratio of 4 kg to 800 grams?

- A) 02:04 B) 04:08  
C) 08:04 D) 05:01

Answer: D) 05:01

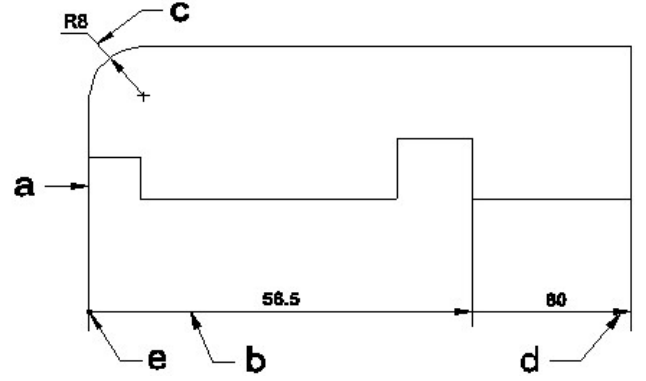
7. Identify the line □ b□ ? | □ ಸಾಠಿನ್ನು ಗುರುತಿಸುವುದೇ?

- A) Aviation shear | ವಿವಿಯೇಷನ್ ಸಿಯರ್  
C) Cutting plier | ಕಟಿಂಗ್ ಪ್ಲಿಯರ್

B) Hawk-billed shear | ಹಾಕ್-ಬಿಲ್ಡ್ ಸಿಯರ್

D) Double cutting shear | ಡಬಲ್ ಕಟಿಂಗ್ ಸಿಯರ್

Answer: C) Cutting plier | ಕಟಿಂಗ್ ಪ್ಲಿಯರ್



A) Termination of dimension line | ಆಯಾಮ ರೇಖೆಯ ಮುಕ್ತಾಯ

B) Dimension line | ಡೈಮೆನ್ಷನ್ ಲೈನ್

C) Extension line | ಎಕ್ಸ್ಟೆನ್ಷನ್ ಲೈನ್

D) Leader line | ಲೀಡರ್ ಲೈನ್

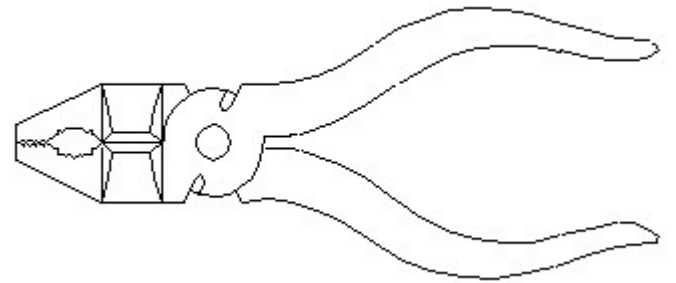
Answer: B) Dimension line | ಡೈಮೆನ್ಷನ್ ಲೈನ್

8. Rehana faced a problem with her project. She is dealing with a problem with the right attitude. This is an example of-

- A) Negative attitude B) Technical skill  
C) Scientific skill D) Positive attitude

Answer: D) Positive attitude

9. Identify the name of tool? | ಉಪಕರಣದ ಹೆಸರನ್ನು ಗುರುತಿಸುವುದೇ?



A) Aviation shear | ವಿವಿಯೇಷನ್ ಸಿಯರ್

B) Hawk-billed shear | ಹಾಕ್-ಬಿಲ್ಡ್ ಸಿಯರ್

C) Cutting plier | ಕಟಿಂಗ್ ಪ್ಲಿಯರ್

D) Double cutting shear | ಡಬಲ್ ಕಟಿಂಗ್ ಸಿಯರ್

Answer: C) Cutting plier | ಕಟಿಂಗ್ ಪ್ಲಿಯರ್

10. Things that one is good at doing are \_\_\_\_\_.

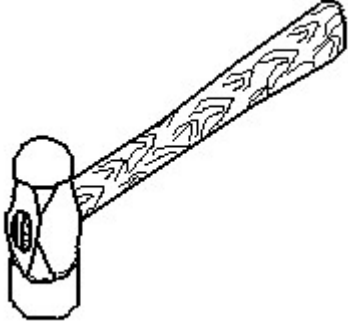
- A) Abilities B) Concerns

C) Interests

D) Passion

Answer: A) Abilities

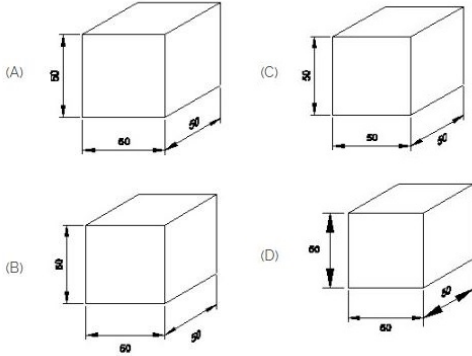
11. Identify the name of tool? | ಉಪಕರಣದ ಹೆಸರನ್ನು ಗುರುತಿಸುವುದೇ?



- A) Ball peen hammer | ಬಾಲ್ ಪೆನ್ ಸುತ್ತಿಗೆ  
B) Straight peen hammer | ನೇರ ಪೆನ್ ಸುತ್ತಿಗೆ  
C) Cross peen hammer | ಕ್ರಾಸ್ ಪೀನ್ ಸುತ್ತಿಗೆ  
D) Sledge hammer | ಸ್ಲೆಡ್ಜ್ ಸುತ್ತಿಗೆ

Answer: A) Ball peen hammer | ಬಾಲ್ ಪೆನ್ ಸುತ್ತಿಗೆ

12. Which drawing dimension is correct as per IS standard? | IS ಮಾನದಂಡದ ಪ್ರಕಾರ ಯಾವ ರೇಖಾಚಿತ್ರದ ಆಯಾಮವು ಸರಿಯಾಗಿದೆ?



- A) C  
B) B  
C) D  
D) A

Answer: D) A

13. \_\_\_\_\_ is one of the behavioral skills that is required to organize work efficiently and complete it on time.

- A) Time Management  
B) Cooking  
C) Painting  
D) Dancing

Answer: A) Time Management

14. Inability to do something well is one's \_\_\_\_\_.

- A) Aspiration  
B) Strength  
C) Weakness  
D) Value

Answer: C) Weakness

15. The way we manage/solve the problem is called \_\_\_\_\_.

- A) Positive attitude  
B) Conflict resolution  
C) Passion  
D) Negative attitude

Answer: B) Conflict resolution

16. The way we interact, manage and deal with our external environment is known as \_\_\_\_\_ skills.

- A) Behavioural  
B) Musical  
C) Teaching  
D) Technical

Answer: A) Behavioural

17. Meena likes to learn music in her free time. It is one of her \_\_\_\_\_ to improve.

- A) Logics  
B) Weakness  
C) Value  
D) Interests

Answer: D) Interests

18. Alpan does yoga in the morning. He follows Youtube classes to motivate himself. This is an example of \_\_\_\_\_.

- A) Problem- Solving  
B) Self-motivation  
C) Time Management  
D) Decision-Making

Answer: B) Self-motivation