

March 2026

Question Paper

Student: Yaksheeth puthran

Score: 18/25 (72.00%)

Code: 9319

1. Which component defrosts in frost free refrigerator?

- A) Bulb  
 B) **Heater (Correct)**  
 C) Thermostat  
 D) Capillary tube

2. Which component switches ON/OFF the starting winding in RSIR motor?

- A) Thermostat  
 B) Capacitor  
 C) **Relay (Correct)**  
 D) OLP

3. Which domestic system uses automatic defrost?

- A) **Frost free refrigerator (Correct)**  
 B) Conventional refrigerator  
 C) Split air - conditioner  
 D) Window air - conditioner

4. Which sheet is used to check the tightness of door gasket of a refrigerator?

- A) Rubber (Incorrect)  
 B) **Plastic**  
 C) Copper  
 D) Zinc

5. How the capacity of refrigerator is expressed?

- A) Weightage  
 B) Tonnage (Incorrect)  
 C) Wattage  
 D) **Litres**

6. What is the temperature maintained in the refrigerator freezer?

- A) 0 Degree Centigrade  
 B) **- 15 Degree Centigrade (Correct)**  
 C) - 45 Degree Centigrade  
 D) - 65 Degree Centigrade

7. Which electrical control cuts off heating element in frost free refrigerator?

- A) **Bimetal thermo (Correct)**  
 B) Thermostat  
 C) Relay  
 D) Timer

8. What is the working condition of component during defrost cycle in frost free refrigerator?

- A) Evaporator fan motor is running  
 B) **Compressor is not running (Correct)**  
 C) Thermostat cuts off  
 D) Relay activated

9. Which component actuates the defrost cycle in frost free refrigerator?

- A) Bimetal thermo  
 B) Defrost heater

C) **Timer (Correct)**

D) Relay

10. Which movement of plunger energises the start winding in relay operation?

- A) **Vertically up (Correct)**  
 B) Bottom side  
 C) Vertically down  
 D) Horizontally left

11. What is the advantage of sealed system compared to open type system?

- A) Mechanical efficiency is greater  
 B) Cylinder lubrication is easier  
 C) Any refrigerant can be used  
 D) **No shaft seal is required (Correct)**

12. What is the effect of bimetal thermo sticks in ON position in frost free refrigerator?

- A) Accumulation of frost (Incorrect)  
 B) More cooling  
 C) Poor cooling  
 D) **No cooling**

13. What is the cause for refrigerator door gap at closing position?

- A) **Uneven floor level (Correct)**  
 B) Either side gap more  
 C) Either side gap less  
 D) Uneven condenser level

14. Which component is replaced to prevent air entering the refrigerator cabinet?

- A) Thermostat  
 B) **Door gasket (Correct)**  
 C) Door paint  
 D) Door hinges

15. What is the result if discharge reed is broken in open type compressor?

- A) Poor pumping (Incorrect)  
 B) More pumping  
 C) Oil pumping  
 D) **No pumping**

16. What is the unit of speed?

- A) **Metre/second (Correct)**  
 B) Metre/second<sup>2</sup>  
 C) Metre/minute  
 D) Metre/hour

17. What is called if a body posses both magnitude and direction of velocity?

- A) Speed  
 B) Velocity

C) Vector quantity  
(Correct)

D) Scalar quantity

18. What is velocity of a body travels a distance of 168 metres in a line in 21 seconds?

- A) 6 m/sec  
C) 10 m/sec

- B) 8 m/sec (Correct)  
D) 12 m/sec

19. What is the potential energy, if a body of mass 250 kg is at a height of 30 metre?

- A) 72.57 KJ  
C) 74.57 KJ

- B) 73.57 KJ (Correct)  
D) 75.57 KJ

20. What is the potential energy in a body of mass 10 kg kept on the top of a pole 20 metres height?

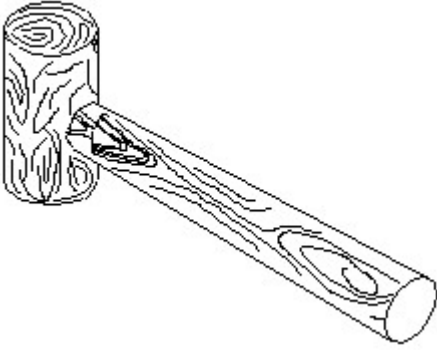
- A) 1942 Joules

- B) 1952 Joules

C) 1962 Joules (Correct)

- D) 1972 Joules

21. Identify the name of tool? | ಉಪಕರಣದ ಹೆಸರನ್ನು ಗುರುತಿಸುವುದೇ?



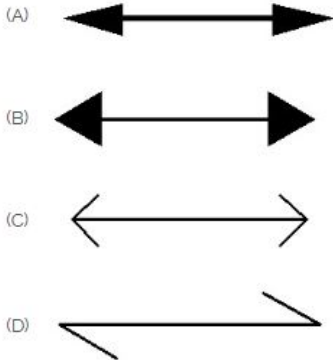
A) Ball pein hammer | ಬಾಲ್ ಪೆನ್ ಸುತ್ತಿಗೆ

B) Mallet | ಮ್ಯಾಲೆಟ್ (Correct)

C) Cross pein hammer | ಕ್ರಾಸ್ ಪೀನ್ ಸುತ್ತಿಗೆ

D) Straight pein hammer | ಸ್ಟ್ರೈಟ್ ಪೆಯಿನ್ ಸುತ್ತಿಗೆ

22. Which arrow head is correct as per standard? | ಮಾನದಂಡದ ಪ್ರಕಾರ ಯಾವ ಬಾಣದ ಹೆಡ್ ಸರಿಯಾಗಿದೆ?



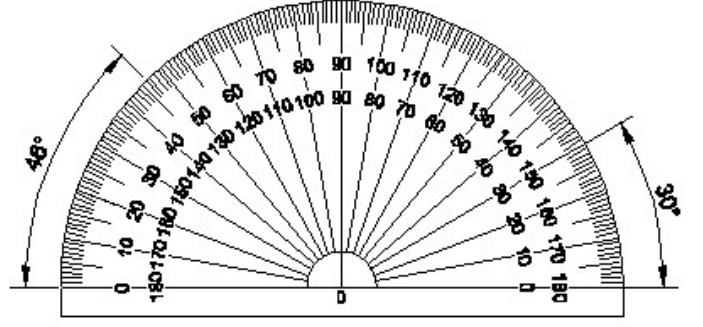
A) A

B) B (Incorrect)

C) C

D) D

23. Identify the name of instrument? | ಉಪಕರಣದ ಹೆಸರನ್ನು ಗುರುತಿಸುವುದೇ?



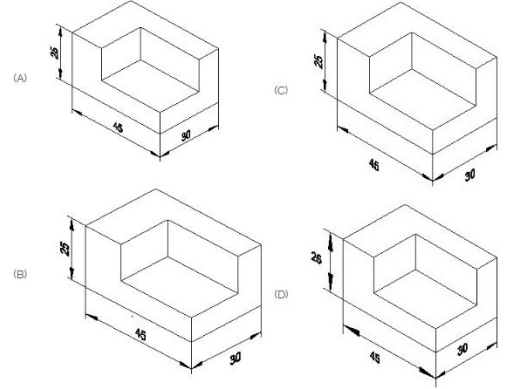
A) Set square | ಸೆಟ್ ಸ್ಕ್ವೇರ್

B) Protractor | ಪ್ರೊಟ್ರಾಕ್ಟರ್ (Correct)

C) French curve | ಫ್ರೆಂಚ್ ಕರ್ವ್

D) T square | ಟ್ ಸ್ಕ್ವೇರ್

24. Which drawing dimension is correct as per standard drawing practice? | ಸ್ಟಾಂಡರ್ಡ್ ಡ್ರಾಯಿಂಗ್ ಅಭ್ಯಾಸದ ಪ್ರಕಾರ ಯಾವ ಡ್ರಾಯಿಂಗ್ ಆಯಾಮ ಸರಿಯಾಗಿದೆ?



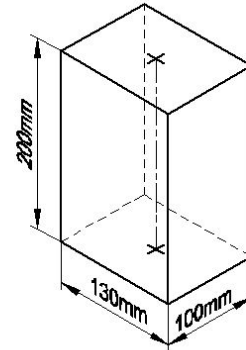
A) A

B) B (Incorrect)

C) C

D) D

25. Identify the name of prism? | ಪ್ರಿಸ್ಮ್ ಹೆಸರನ್ನು ಗುರುತಿಸುವುದೇ?



A) Rectangle prism | ಆಯತ ಪ್ರಿಸ್ಮ್

B) Square prism | ಚದರ ಪ್ರಿಸ್ಮ್ (Incorrect)

C) Triangular prism | ತ್ರಿಕೋನ ಪ್ರಿಸ್ಮ್

D) Hexagonal prism | ಷಡ್ಭುಜೀಯ ಪ್ರಿಸ್ಮ್