

# GOVERNMENT ITI SHAHAPUR

## ITI Quiz - 05-May-2026 09:43 AM

Q. ID: ITISKILL4708GO | May 2026

36.00% 9 / 25

Student Name	Abhishaka	Access Code	8900
Attempt No.	#1	Completion Time	10:24 AM
Rank	#14	Total Questions	25

9 SCORE

25 MAX MARKS

9 CORRECT

16 INCORRECT

### Answer Review

Q1 **INCORRECT** Which parameter is measured by a multimeter?

A. Voltage

B. Energy

C. Frequency

D. Time duration

Q2 **INCORRECT** What is the advantage of using digital multimeter?

A. Accuracy

B. Linear scale

C. Easy portability

D. Logarithmic scale

Q3 **INCORRECT** How many ohms is equal to one Mega ohm?

A. 10 kW

B. 100 kW

C. 1000 kW

D. 2000 kW

Q4 **CORRECT** Which property of the capacitor stores electrical energy in electrostatic field?

A. Dielectric

B. Capacitance

C. Stray capacitance

D. Capacitive reactance

Q5 **CORRECT** Which unit is used to measure capacitance value?

A. Mho

B. Ohm

C. Farad

D. Henry

Q6 **INCORRECT** What is the use of screw driver?

A. Hold the screws

B. Tighten or loosen screws

C. Tighten or loosen bolts

D. Tighten or loosen rivets

**Q7** **INCORRECT** What is the first step to rescue the person in electrical contact?

**A.** Break the contact

**B.** Call the doctor

**C.** Switch OFF power supply

**D.** Pull the person from electrical contact

**Q8** **CORRECT** What is the reason for electric fire?

**A.** Deviation

**B.** Open circuit

**C.** Overloading

**D.** Proper earthing

**Q9** **INCORRECT** To apply for a job, what is the next step after making an impactful resume?

**A.** Sending the resume to the employer

**B.** Writing an impressive cover letter

**C.** Preparing for interview

**D.** Applying for the job

**Q10** **INCORRECT** Pranav is working on his resume. While reviewing his resume, what should Pranav keep in mind?

**A.** Check for spelling and grammar mistakes

**B.** Ensure that the information provided is correct

**C.** Highlight skills and qualifications that match the job

**D.** All of these

Q11 **CORRECT** What is an example of formal written communication?

- A. Texting a friend
- B. Sending a WhatsApp message
- C. Writing an email to your manager
- D. Posting on social media platforms

Q12 **INCORRECT** During a lunch break, Arjun overhears his coworkers gossiping about another coworker. What should Arjun do?

- A. Tell his coworkers that gossiping is inappropriate workplace behaviour
- B. Join the conversation and share his own opinion about the coworker
- C. Tell another coworker about the gossip
- D. Listen to the gossip

Q13 **CORRECT** Why is it important to have a business plan before starting a business?

- A. To attract investors and get a loan
- B. To outline goals and set clear direction for growth
- C. To identify potential challenges and risks
- D. All of these

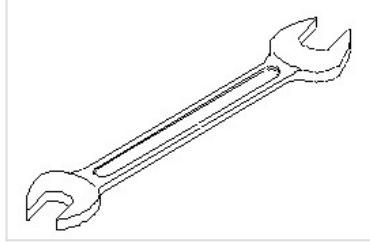
Q14 **INCORRECT** Raghav joined a new company after COVID. He is nervous about using the digital tablets provided at work. What should he do?

- A. Complain to his manager
- B. Ask his coworkers to do all the digital work
- C. Quit his job
- D. Keep an open mind and ask his coworkers to teach him

Q15 **CORRECT** How can you become self-employed?

- A. Learn about the work, take small courses
- B. Try your idea on a small scale
- C. Use chats, local ads and ask friends to spread the word
- D. All of these

Q16 **INCORRECT** Identify the name of tool? | ಉಪಕರಣದ ಹೆಸರನ್ನು ಗುರುತಿಸುವುದೇ?

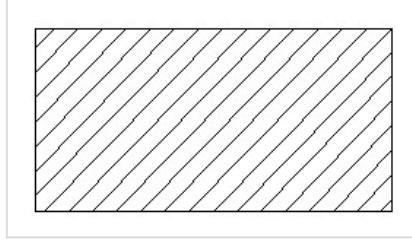


- A. Open end spanner | ಓಪನ್ ಎಂಡ್ ಸ್ಪ್ಯಾನರ್
- B. Ring spanner | ರಿಂಗ್ ಸ್ಪ್ಯಾನರ್
- C. Combination spanner | ಕಾಂಬಿನೇಶನ್ ಸ್ಪ್ಯಾನರ್
- D. Adjustable spanner | ಹೊಂದಿಸಬಹುದಾದ ಸ್ಪ್ಯಾನರ್

Q17 **INCORRECT** What is the trimmed size of A4 sheet? | A4 ಹಾಳೆಯ ಟ್ರಿಮ್ ಮಾಡಿದ ಗಾತ್ರ ಎಷ್ಟು?

- A. 841 x 1189
- B. 594 x 841
- C. 210 x 297
- D. 148 x 210

Q18 **INCORRECT** Identify the conventional symbol of material? | ವಸ್ತುವಿನ ಕನ್ವೆಷನಲ್ ಚಿಹ್ನೆಯನ್ನು ಗುರುತಿಸಿ?



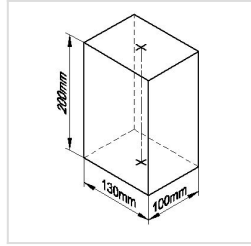
A. Lead | ಲೀಡ್

B. Steel | ಸ್ಟೀಲ್

C. Glass | ಗಾಜು

D. Porcelain | ಪಿಂಗಾಚಿ

Q19 **CORRECT** Identify the name of prism? | ಪ್ರಿಸ್ಮ್ ಹೆಸರನ್ನು ಗುರುತಿಸುವುದೇ?



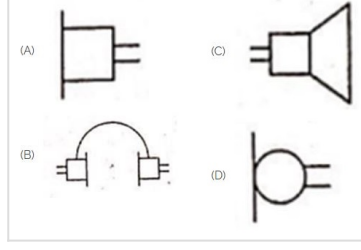
A. Rectangle prism | ಆಯತ ಪ್ರಿಸ್ಮ್

B. Square prism | ಚದರ ಪ್ರಿಸ್ಮ್

C. Triangular prism | ತ್ರಿಕೋನ ಪ್ರಿಸ್ಮ್

D. Hexagonal prism | ಷಡ್ಭುಜೀಯ ಪ್ರಿಸ್ಮ್

Q20 **INCORRECT** Identify the symbol used for microphone (general) in electrical and electronic circuits. | ಎಲೆಕ್ಟ್ರಿಕಲ್ ಮತ್ತು ಎಲೆಕ್ಟ್ರಾನಿಕ್ ಸರ್ಕ್ಯೂಟ್‌ಗಳಲ್ಲಿ ಮೈಕ್ರೋಫೋನ್ (ಸಾಮಾನ್ಯ) ಗಾಗಿ ಬಳಸುವ ಚಿಹ್ನೆಯನ್ನು ಗುರುತಿಸಿ.



A. A

B. B

C. C

D. D

Q21 **INCORRECT** What is the name of the gate | ಗೇಟ್ ಹೆಸರೇನು?



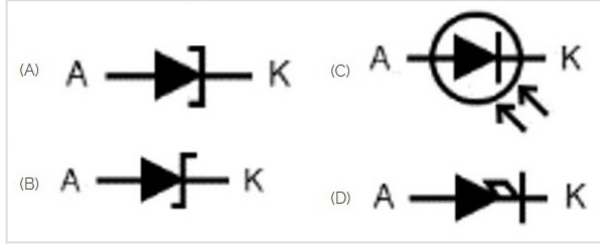
A. NOT Gate | NOT ಗೇಟ್

B. Ex-NOR Gate | Ex-NOR ಗೇಟ್

C. OR Gate | OR ಗೇಟ್

D. AND Gate | AND ಗೇಟ್

Q22 **INCORRECT** Which is photo diode? | ಫೋಟೋ ಡಯೋಡ್ ಯಾವುದು?



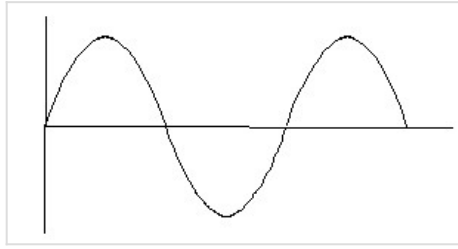
A. A

B. B

C. C

D. D

Q23 **INCORRECT** Identify the wave form. | ವೇವ್ ಫಾರ್ಮ್ ವನ್ನು ಗುರುತಿಸಿ.



A. Square wave | ಸ್ಕ್ವೇರ್ ವೇವ್

B. Sine wave | ಸೈನ್ ವೇವ್

C. Triangle wave | ತ್ರಿಕೋನ ವೇವ್

D. Saw-tooth wave | ಸಾ-ಟೂತ್ ವೇವ್

Q24 **CORRECT** Which is ball peen hammer? | ಬಾಲ್ ಪೀನ್ ಸುತ್ತಿಗೆ ಯಾವುದು?



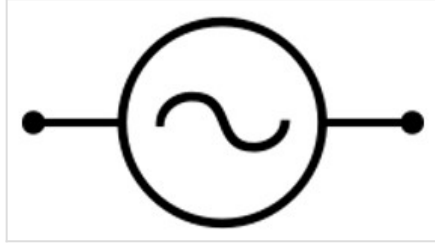
A. A

B. B

C. C

D. D

Q25 **CORRECT** Identify the given symbol | ನೀಡಿರುವ ಚಿಹ್ನೆಯನ್ನು ಗುರುತಿಸಿ



A. AC

B. DC

C. Ohms | ಓಮ್ಸ್

D. Inductance | ಇಂಡಕ್ಟೆನ್ಸ್